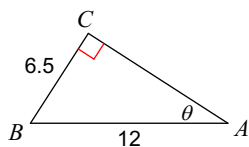


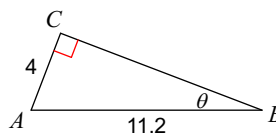
Trig Function Review

Find the measure of each angle indicated. Round to the nearest tenth.

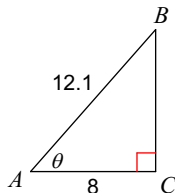
1)



2)

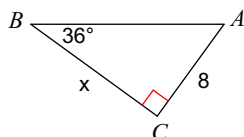


3)

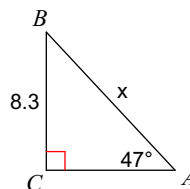


Find the measure of each side indicated. Round to the nearest tenth.

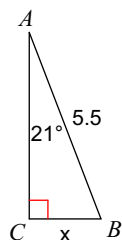
4)



5)



6)



In each problem, angle C is a right angle. Find the side indicated to the nearest tenth.

7) Find a if $b = 5$, $m\angle B = 60^\circ$ 8) Find b if $m\angle B = 53^\circ$, $c = 5$ 9) Find b if $a = 6$, $m\angle B = 56^\circ$