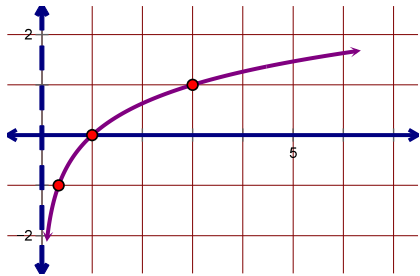
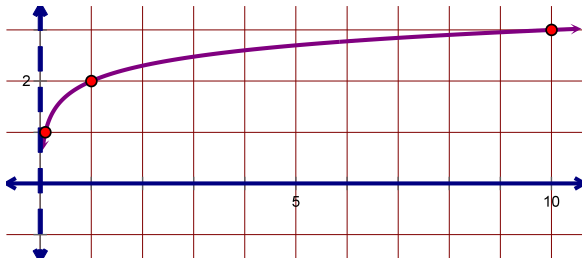


# Graphing Logs – Answers

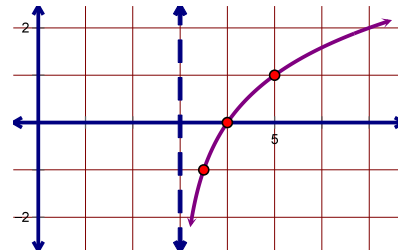
1.  $D:(0, \infty)$   $R:(-\infty, \infty)$



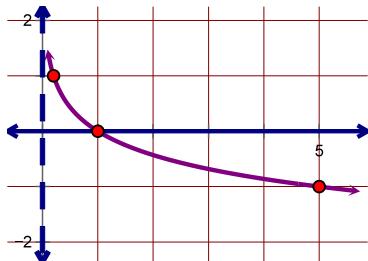
2.  $D:(0, \infty)$   $R:(-\infty, \infty)$



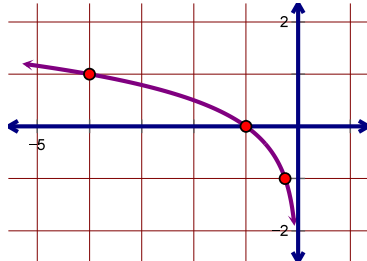
3.  $D:(3, \infty)$   $R:(-\infty, \infty)$



4.  $D:(0, \infty)$   $R:(-\infty, \infty)$



5.  $D:(-\infty, 0)$   $R:(-\infty, \infty)$



6.  $D:(-1, \infty)$   $R:(-\infty, \infty)$

