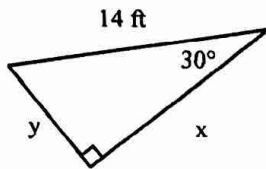
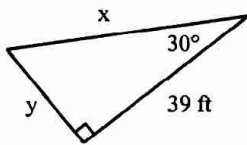


### Quiz Review

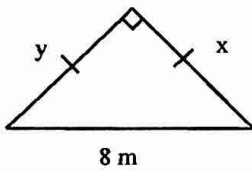
1. Find X and Y



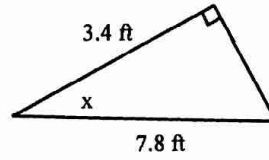
2. Find X and Y



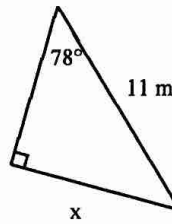
3. Find X and Y



4. Solve for angle X

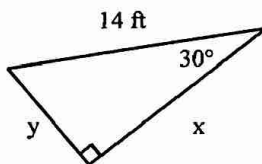


5. Solve for x

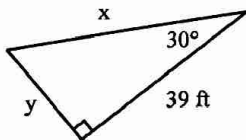


### Quiz Review

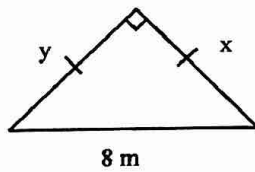
1. Find X and Y



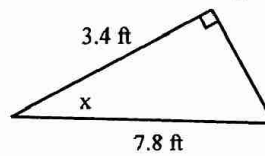
2. Find X and Y



3. Find X and Y



4. Solve for angle X



5. Solve for x

