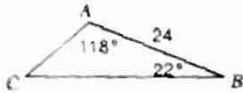


The Law of Sines

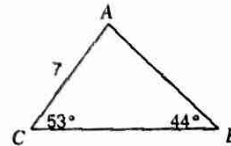
HW 114

Find each measurement indicated. Round your answers to the nearest tenth.

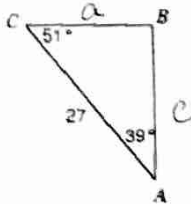
1) Find AC




2) Find AB



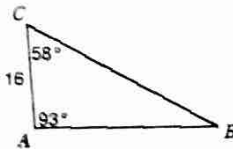
3) Solve the triangle.



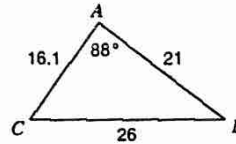
4) Find AB



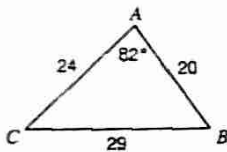
5) Find BC



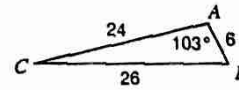
6) Find  $m\angle C$



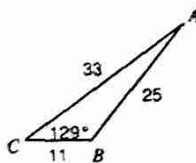
7) Find  $m\angle C$



8) Find  $m\angle C$



9) Find  $m\angle A$



10) Find  $m\angle C$

